




Name _____

Write subtraction facts about the pizza toppings.


4 olives. 


GoldiFox eats 2. $\begin{array}{r} \\ - 2 \\ \hline \end{array}$

How many are left? s


3 slices of tomato. 


A cat steals 1. $\begin{array}{r} \\ - 1 \\ \hline \end{array}$

How many are left? s


5 slices of onion. 


2 fall on the floor. $\begin{array}{r} \\ - 2 \\ \hline \end{array}$

How many remain? s


3 rings of pineapple. 


2 are rotten. $\begin{array}{r} \\ - 2 \\ \hline \end{array}$

How many are not rotten? s


4 strips of bacon. 

A dog eats 3. $\begin{array}{r} \\ - 3 \\ \hline \end{array}$

How many remain? s

5 bell peppers. 

3 are green. $\begin{array}{r} \\ - 3 \\ \hline \end{array}$

How many are not green? s