








Freddie Falcon  has six red and green tail feathers .
Freddie  uses two of his tail feathers  to make a feather
duster . How many tail feathers  does Freddie 
have left?



$$\begin{array}{r} 6 \\ - 2 \\ \hline \end{array}$$