

Name \_\_\_\_\_



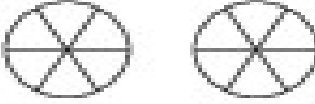







Date \_\_\_\_\_

Comparing Fractions

## Inside the Warehouse

Color each shape to show the fraction.

Write < or > in each  $\bigcirc$ .

 <p>A. <math>\frac{1}{4} \bigcirc \frac{2}{10}</math></p>	 <p>B. <math>\frac{3}{10} \bigcirc \frac{3}{10}</math></p>
 <p>C. <math>\frac{2}{10} \bigcirc \frac{2}{12}</math></p>	 <p>D. <math>\frac{2}{3} \bigcirc \frac{2}{4}</math></p>
 <p>E. <math>\frac{1}{4} \bigcirc \frac{1}{8}</math></p>	 <p>F. <math>\frac{2}{10} \bigcirc \frac{3}{10}</math></p>
 <p>G. <math>\frac{2}{10} \bigcirc \frac{2}{10}</math></p>	 <p>H. <math>\frac{3}{12} \bigcirc \frac{3}{10}</math></p>
 <p>I. <math>\frac{2}{10} \bigcirc \frac{2}{10}</math></p>	 <p>J. <math>\frac{2}{10} \bigcirc \frac{2}{10}</math></p>



Remember to color each shape to show the fraction and write < or > in each  $\bigcirc$ .