


Divide Groups of Fruit


Divide the fruit into groups to do division.

Name _____


Divide the pears into two equal groups.

					
How many pears are there?		How many groups of pears are there?		How many pears are in each group?	
$4 \div 2 =$					

Divide the bananas into two equal groups.

					
How many bananas are there?		How many groups of bananas are there?		How many bananas are in each group?	
$6 \div 2 =$					

Divide the lemons into two equal groups.

					
How many lemons are there?		How many groups of lemons are there?		How many lemons are in each group?	
$8 \div 2 =$					