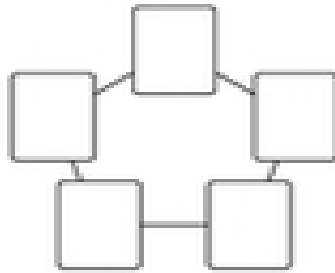


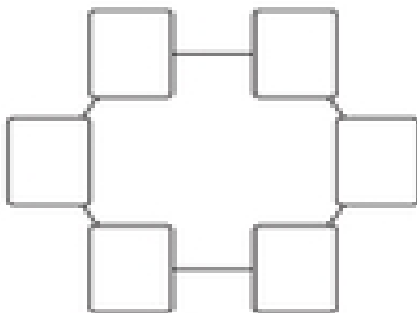
# Consecutive Numbers

Consecutive Numbers are numbers that are in order. For example, the numbers 2 and 3 are consecutive. Write in the playing cards needed to complete the following puzzles.

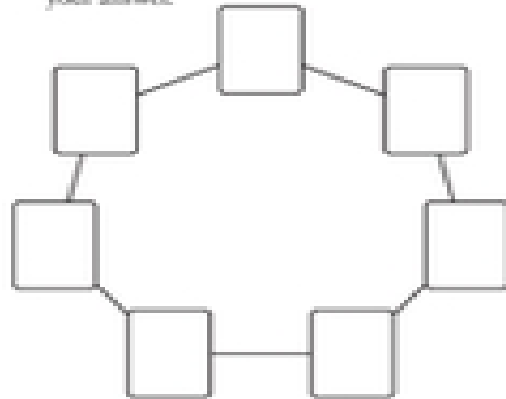
1. Place the value of Ace through Five of a suit so that no two consecutive numbers are connected by a segment in the pentagon diagram. Ace = 1. Record your answer.



2. Place the value of Ace through Six of a suit so that no two consecutive numbers are connected by a segment in the hexagon diagram. Ace = 1. Record your answer.



3. Place the value of Ace through Seven of a suit so that no two consecutive numbers are connected by a segment in the heptagon diagram. Ace = 1. Record your answer.



4. Place the value of Ace through Eight of a suit so that no two consecutive numbers are connected by a segment in the octagon diagram. Ace = 1. Record your answer.

