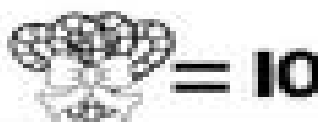








KN8TA.2

Name: _____

Candy Cane Count

Write how many tens and ones.
Write how many in all.



	<table border="1"><tbody><tr><td> </td><td> </td><td> </td></tr><tr><td>tens</td><td>ones</td><td>in all</td></tr></tbody></table>				tens	ones	in all
tens	ones	in all					
	<table border="1"><tbody><tr><td> </td><td> </td><td> </td></tr><tr><td>tens</td><td>ones</td><td>in all</td></tr></tbody></table>				tens	ones	in all
tens	ones	in all					
	<table border="1"><tbody><tr><td> </td><td> </td><td> </td></tr><tr><td>tens</td><td>ones</td><td>in all</td></tr></tbody></table>				tens	ones	in all
tens	ones	in all					
	<table border="1"><tbody><tr><td> </td><td> </td><td> </td></tr><tr><td>tens</td><td>ones</td><td>in all</td></tr></tbody></table>				tens	ones	in all
tens	ones	in all					
	<table border="1"><tbody><tr><td> </td><td> </td><td> </td></tr><tr><td>tens</td><td>ones</td><td>in all</td></tr></tbody></table>				tens	ones	in all
tens	ones	in all					
	<table border="1"><tbody><tr><td> </td><td> </td><td> </td></tr><tr><td>tens</td><td>ones</td><td>in all</td></tr></tbody></table>				tens	ones	in all
tens	ones	in all					