

Name _____
groups of
repeated addition

Date _____


6. Draw 7 smiley faces in the circle.



_____ groups of _____

repeated addition


6. Draw 3 squares in each circle.



_____ groups of _____

repeated addition


7. Draw 6 plus signs in each circle.



_____ groups of _____

repeated addition

8. Draw 2 rectangles in each circle.



_____ groups of _____

repeated addition