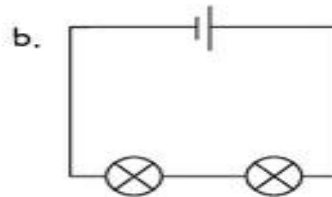
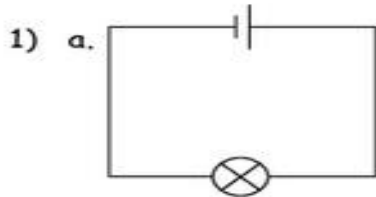
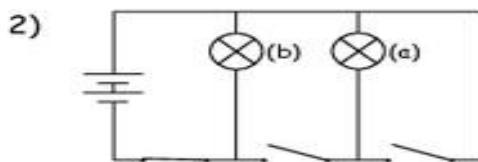


Name: \_\_\_\_\_ Subject: Year 6 Science  
 Date: \_\_\_\_\_ Unit: 6g Changing circuits

Look at the circuits below and answer the questions:

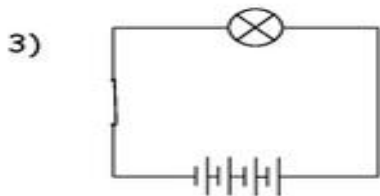


Which diagram would produce the brightest bulb? \_\_\_\_\_



Which bulb in this circuit would light up? \_\_\_\_\_  
 Why would the other bulb not light up?

\_\_\_\_\_  
 \_\_\_\_\_



What would happen to the bulb in this circuit? \_\_\_\_\_

\_\_\_\_\_  
 \_\_\_\_\_