

Name : \_\_\_\_\_

Score : \_\_\_\_\_

Teacher : \_\_\_\_\_

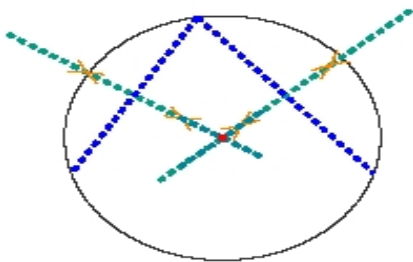
Date : \_\_\_\_\_

---

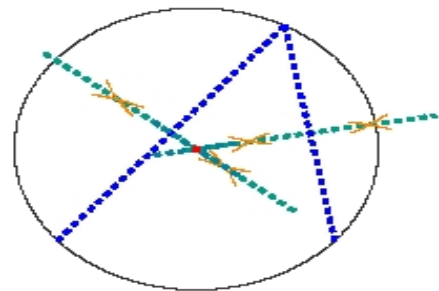
### Circle Constructions

Locate the center of each circle.

1)

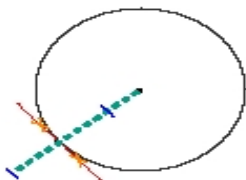


2)



Construct a line segment tangent to the circle through the given point.

3)



4)

