



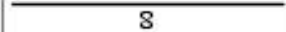


Name: \_\_\_\_\_

Wednesday

**Math Practice: Fluently add and subtract within 1000 (3.NBT.2)**

**Draw the problem using base ten blocks. Then solve.**

Problem	Hundreds	Tens	Ones
$272 - 234 =$   $\begin{array}{r} 272 \\ - 234 \\ \hline 48 \end{array}$	 0	 4	 8
$431 - 248 =$			
$721 - 231 =$			

**Solve. Write the number in standard form.**

$$\begin{array}{r} 500 + 10 + 5 \\ 300 + 30 + 2 \end{array}$$

$$\begin{array}{r} 600 + 50 + 9 \\ 100 + 20 + 3 \end{array}$$

$$\begin{array}{r} 500 + 40 + 8 \\ 400 + 40 + 5 \end{array}$$

Standard form \_\_\_\_\_

Standard form \_\_\_\_\_

Standard form \_\_\_\_\_

$$\begin{array}{r} 300 + 90 + 1 \\ 200 + 30 + 8 \end{array}$$

$$\begin{array}{r} 600 + 60 + 6 \\ 200 + 20 + 9 \end{array}$$

$$\begin{array}{r} 400 + 80 + 7 \\ 200 + 10 + 3 \end{array}$$

Standard form \_\_\_\_\_

Standard form \_\_\_\_\_

Standard form \_\_\_\_\_