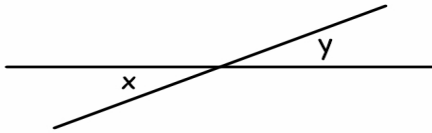


Name \_\_\_\_\_ Date \_\_\_\_\_

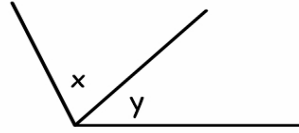
# ANGLES RELATIONSHIP

Name the relationship of these angles: complementary, linear pair, vertical, or adjacent!

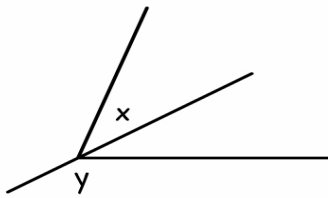
1)



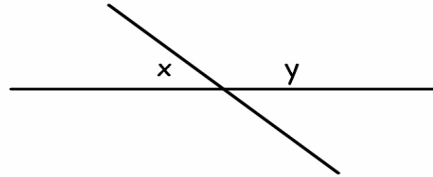
2)



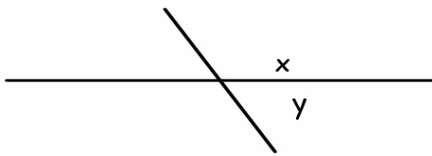
3)



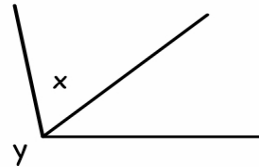
4)



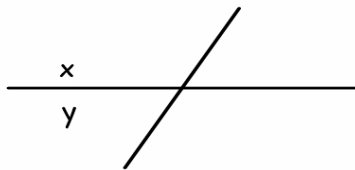
5)



6)



7)



8)

