




Name:	Date:
-------	-------


# Insect Math


Add or subtract.


1.  
67  's  
32 more.  
How many in all?

2.  
45  's.  
21 flew away.  
How many now?

3.  
58  's  
20 jumped away.  
How many are left?

4.  
32  's at the picnic.  
46 joined them.  
How many altogether?

5.  
49  's in the hive.  
26 went to find flowers.  
How many are left at the hive?

6.  
50  's at the pond. 22 more flew to the pond.  
How many are there in all?