


Mass

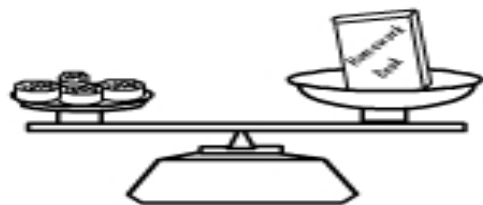
Name: _____

Measuring mass in grams and pounds.

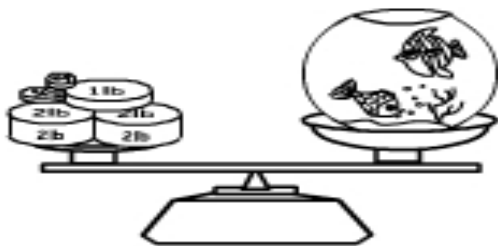
These are the masses we used to measure objects on the balancing scales.

**908g****454g****100g****50g****10g****5g**

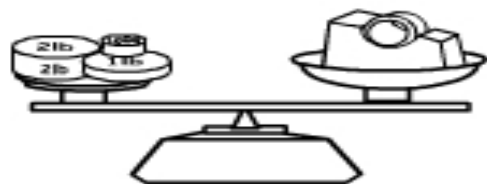
The teddy bear weighs _____ g



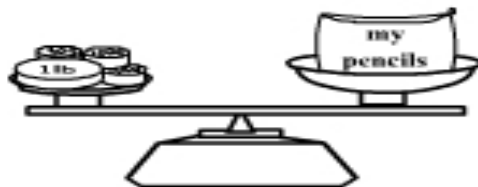
The book weighs _____ g



The fishtank weighs _____ g



The tape dispenser weighs _____ g



The pencilcase weighs _____ g



The pencils weighs _____ g