











Name: \_\_\_\_\_

## Subtracting Larger Numbers

Directions: Subtract the following numbers. Color the star if you subtracted correctly.

1.  $\begin{array}{r} 45,391 \\ - 9,482 \\ \hline \end{array}$	6.  $\begin{array}{r} 9,481,389 \\ - 4,792,472 \\ \hline \end{array}$
2.  $\begin{array}{r} 56,482 \\ - 35,829 \\ \hline \end{array}$	7.  $\begin{array}{r} 8,318,283 \\ - 4,392,445 \\ \hline \end{array}$
3.  $\begin{array}{r} 592,547 \\ - 397,384 \\ \hline \end{array}$	8.  $\begin{array}{r} 3,492,489 \\ - 1,490,985 \\ \hline \end{array}$
4.  $\begin{array}{r} 913,519 \\ - 645,391 \\ \hline \end{array}$	9.  $\begin{array}{r} 7,491,418 \\ - 3,749,391 \\ \hline \end{array}$
5.  $\begin{array}{r} 590,231 \\ - 289,458 \\ \hline \end{array}$	10.  $\begin{array}{r} 8,091,438 \\ - 4,391,447 \\ \hline \end{array}$