









Name \_\_\_\_\_ Creating a graph

### A Charming Graph



 Rainbows	 Pink Hearts	 Shooting Stars	 Red Balloons	 Purple Horseshoes	 Four-Leaf Clovers	 Pink Stars	 Blue Moons

1. Which shape(s) do you have the most of? \_\_\_\_\_
2. Which shape(s) do you have the least of? \_\_\_\_\_
3. Add together your rainbows and shooting stars. \_\_\_\_\_
4. Add together your red balloons and purple horseshoes. \_\_\_\_\_
5. Do you have more four-leaf clovers or pink hearts? \_\_\_\_\_
6. Subtract the smallest total from the largest. \_\_\_\_\_
7. Do you have the same number of any shapes?      yes      no  
if so, which ones? \_\_\_\_\_