









Name _____ Creating a graph

A Charming Graph



 Rainbow	 Pink Heart	 Shooting Star	 Red Balloon	 Purple Horseshoe	 Four-Leaf Clover	 Pink Piggy Bank	 Pink Moon

1. Which shape(s) do you have the most of? _____
2. Which shape(s) do you have the least of? _____
3. Add together your rainbows and shooting stars. _____
4. Add together your red balloons and purple horseshoes. _____
5. Do you have more four-leaf clovers or pink hearts? _____
6. Subtract the smallest total from the largest. _____
7. Do you have the same number of any shapes? yes no
 If so, which ones? _____