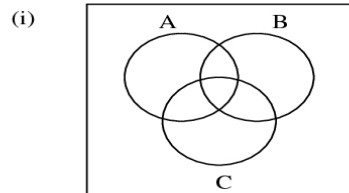


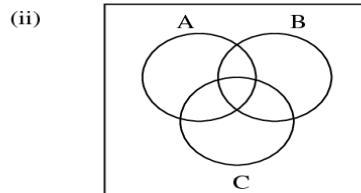
Math 211 Sets Practice Worksheet

Part I:

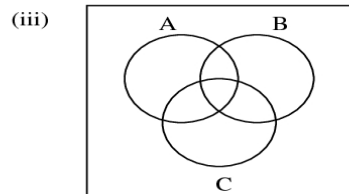
Shade the region of the Venn Diagram indicated by the following sets.



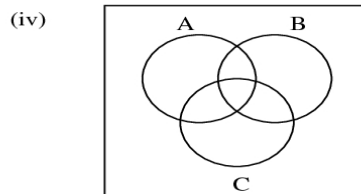
Shade: $(A' \cup B) \cap C$



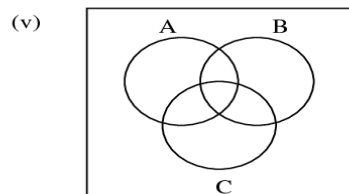
Shade: $(A \cap B)' \cup C$



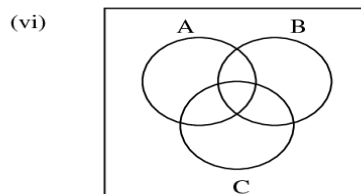
Shade: $A \cup (C' \cup B)$



Shade: $(A \cap B') \cap C$



Shade: $A' \cup (C' \cap B)$



Shade: $(A \cap B)' \cup C$