

Name _____

Temperature

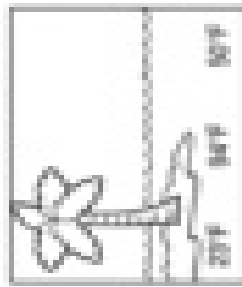
Choosing a reasonable temperature

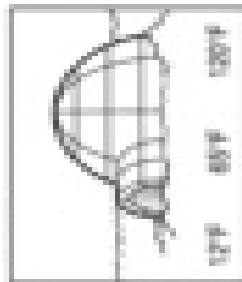
A Moose for All Seasons

Fill in the missing numbers on the thermometers.

Hint: Count by tens.


Circle the best temperature for each picture.

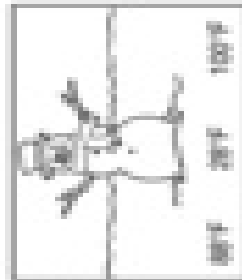
A.  20°F 80°F 50°F


B.  17°F 60°F 100°F


C.  70°F 20°F 100°F

D.  60°F 20°F 110°F


E.  100°F 50°F 50°F

F.  80°F 20°F 100°F

G.  210°F 30°F 100°F

H.  20°F 140°F 70°F

I.  60°F 40°F 100°F



Answer: Which season is your favorite? Write about it. As you write, describe the items of clothing you wear during the season.