







Name: _____

Make Tens to Solve

 $7 + 6 = \underline{\quad}$ $10 + \underline{\quad} = \underline{\quad}$	 $8 + 4 = \underline{\quad}$ $10 + \underline{\quad} = \underline{\quad}$
 $9 + 7 = \underline{\quad}$ $10 + \underline{\quad} = \underline{\quad}$	 $8 + 8 = \underline{\quad}$ $10 + \underline{\quad} = \underline{\quad}$
 $9 + 5 = \underline{\quad}$ $10 + \underline{\quad} = \underline{\quad}$	 $9 + 8 = \underline{\quad}$ $10 + \underline{\quad} = \underline{\quad}$