


Name: \_\_\_\_\_

# Making 10


Use the 10 frames to add the pirates treasure!




$4 + \square = 10$




$6 + \square = 10$




$2 + \square = 10$



$5 + \square = 10$



$1 + \square = 10$



$7 + \square = 10$

