

Name _____




Valentine

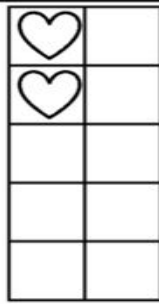
Let's Make 10




Directions: Fill in the number of hearts needed to make 10 on each ten frame.



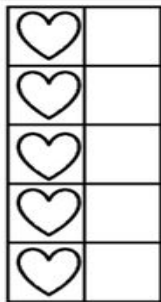
$$\begin{array}{r} 3 \\ + \square \\ \hline 10 \end{array}$$




$$\begin{array}{r} 2 \\ + \square \\ \hline 10 \end{array}$$



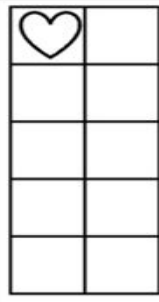
$$\begin{array}{r} 9 \\ + \square \\ \hline 10 \end{array}$$



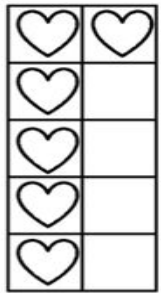
$$\begin{array}{r} 5 \\ + \square \\ \hline 10 \end{array}$$



$$\begin{array}{r} 8 \\ + \square \\ \hline 10 \end{array}$$




$$\begin{array}{r} 1 \\ + \square \\ \hline 10 \end{array}$$



$$\begin{array}{r} 6 \\ + \square \\ \hline 10 \end{array}$$



$$\begin{array}{r} 4 \\ + \square \\ \hline 10 \end{array}$$



$$\begin{array}{r} 7 \\ + \square \\ \hline 10 \end{array}$$