











Name _____

How many sides?



Count the sides on the shape and dot or color the matching numeral.

| | | |
|--|--|--|
|  <input type="radio"/> 2 <input type="radio"/> 3 <input type="radio"/> 4 |  <input type="radio"/> 0 <input type="radio"/> 1 <input type="radio"/> 2 |  <input type="radio"/> 3 <input type="radio"/> 4 <input type="radio"/> 6 |
|  <input type="radio"/> 3 <input type="radio"/> 4 <input type="radio"/> 6 |  <input type="radio"/> 3 <input type="radio"/> 4 <input type="radio"/> 6 |  <input type="radio"/> 3 <input type="radio"/> 4 <input type="radio"/> 6 |
|  <input type="radio"/> 0 <input type="radio"/> 1 <input type="radio"/> 2 |  <input type="radio"/> 2 <input type="radio"/> 3 <input type="radio"/> 4 |  <input type="radio"/> 3 <input type="radio"/> 4 <input type="radio"/> 6 |