






EXERCISE 1

1. A group of children made this tally chart to show the colors they like best.

			
Red	Green	Yellow	Blue
Each  stands for 1 child.			

Study the tally chart.
Then fill in the blanks.

- (a) _____ children like yellow best.
(b) _____ children like blue best.
(c) _____ more children like blue better than green.
(d) _____ is the most popular color.
(e) _____ is the least popular color.