

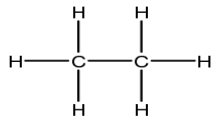
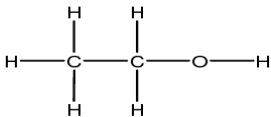
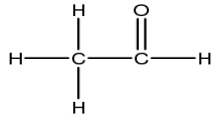
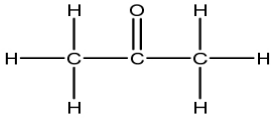
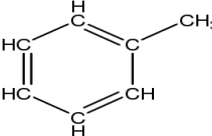
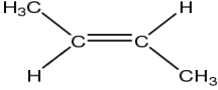
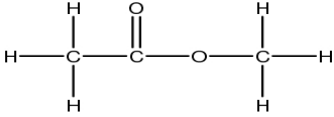
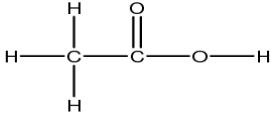
Name _____

Period _____

Alkane Functional Groups – Worksheet #1

Classify the following compounds according to their functional group(s). You do not need to name the compounds. Choose from the following list:

Alcohol, Aldehyde, Alkane, Alkene, Alkyne, Amine, Aromatic, Carboxylic Acid, Ester, Ether, or Ketone

	
1. _____	2. _____
	
3. _____	4. _____
	
5. _____	6. _____
	
7. _____	8. _____