


Fractions

Circle $\frac{2}{4}$




Circle $\frac{5}{6}$




Circle $\frac{2}{5}$



Circle $\frac{5}{7}$



Circle $\frac{6}{8}$



Circle $\frac{2}{3}$

