

Ballerina Showdown









Name: _____ Date: _____

Each Ballerina can only jump a certain amount of times before becoming tired.

Color the Ballerina that jumps the most red and the one that jumps the least blue in each group.

If they jump the same amount of times, color them both green.

Place the appropriate sign in the circle: equal =, greater than (>) or less than (<).

 7	<input type="text"/>	 5
 12	<input type="text"/>	 10
 5	<input type="text"/>	 5
 8	<input type="text"/>	 1