

Reading Analog Clocks (A)

Read each time and write it in the space under the clock.


1.



2.




3.




4.



5.




6.



7.



8.




9.



10.



11.



12.

