

Name : \_\_\_\_\_

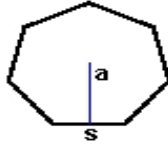
Score : \_\_\_\_\_

Teacher : \_\_\_\_\_

Date : \_\_\_\_\_

**Identify and Calculate the Area and Perimeter for each Polygon.**

1)



$s = 3.4 \text{ ft}$

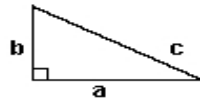
$a = 1.7 \text{ ft}$

Area: \_\_\_\_\_

Perimeter: \_\_\_\_\_

Type: \_\_\_\_\_

2)



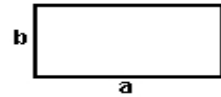
$a = 8.2 \text{ yds}$     $b = 4.6 \text{ yds}$   
 $c = 9.4 \text{ yds}$

Area: \_\_\_\_\_

Perimeter: \_\_\_\_\_

Type: \_\_\_\_\_

3)



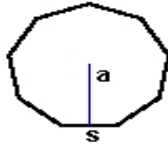
$a = 8.9 \text{ ft}$     $b = 4.4 \text{ ft}$

Area: \_\_\_\_\_

Perimeter: \_\_\_\_\_

Type: \_\_\_\_\_

4)



$s = 3.3 \text{ yds}$

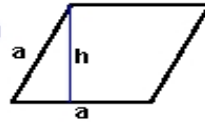
$a = 1.65 \text{ yds}$

Area: \_\_\_\_\_

Perimeter: \_\_\_\_\_

Type: \_\_\_\_\_

5)



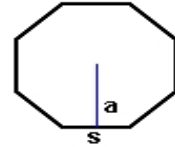
$a = 6.6 \text{ cm}$     $h = 5.98 \text{ cm}$

Area: \_\_\_\_\_

Perimeter: \_\_\_\_\_

Type: \_\_\_\_\_

6)



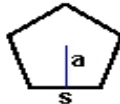
$s = 7.6 \text{ mm}$   
 $a = 3.29 \text{ mm}$

Area: \_\_\_\_\_

Perimeter: \_\_\_\_\_

Type: \_\_\_\_\_

7)



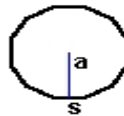
$s = 5.4 \text{ mm}$   
 $a = 2.57 \text{ mm}$

Area: \_\_\_\_\_

Perimeter: \_\_\_\_\_

Type: \_\_\_\_\_

8)



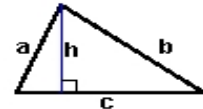
$s = 2.5 \text{ cm}$   
 $a = 1.25 \text{ cm}$

Area: \_\_\_\_\_

Perimeter: \_\_\_\_\_

Type: \_\_\_\_\_

9)



$a = 5.8 \text{ inches}$     $b = 8.68 \text{ inches}$   
 $c = 8.9 \text{ inches}$     $h = 5.4 \text{ inches}$

Area: \_\_\_\_\_

Perimeter: \_\_\_\_\_

Type: \_\_\_\_\_