

Name : \_\_\_\_\_

Score : \_\_\_\_\_

Teacher : \_\_\_\_\_

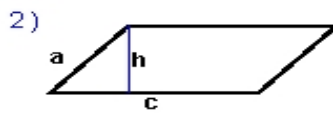
Date : \_\_\_\_\_

**Identify and Calculate the Area and Perimeter for each Quadrilateral.**



$a_1 = 8.7 \text{ ft}$     $a_2 = 4.1 \text{ ft}$   
 $b_1 = 5.86 \text{ ft}$     $b_2 = 4.23 \text{ ft}$   
 $h = 4.2 \text{ ft}$

Area: \_\_\_\_\_  
Perimeter: \_\_\_\_\_  
Type: \_\_\_\_\_



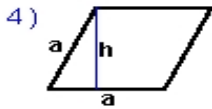
$a = 4.38 \text{ yds}$   
 $c = 9.9 \text{ yds}$     $h = 4.1 \text{ yds}$

Area: \_\_\_\_\_  
Perimeter: \_\_\_\_\_  
Type: \_\_\_\_\_



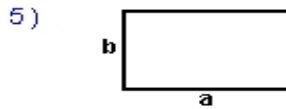
$s = 6.8 \text{ mm}$

Area: \_\_\_\_\_  
Perimeter: \_\_\_\_\_  
Type: \_\_\_\_\_



$a = 5.5 \text{ inches}$     $h = 5.02 \text{ inches}$

Area: \_\_\_\_\_  
Perimeter: \_\_\_\_\_  
Type: \_\_\_\_\_



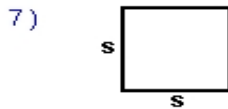
$a = 7.9 \text{ inches}$     $b = 4.8 \text{ inches}$

Area: \_\_\_\_\_  
Perimeter: \_\_\_\_\_  
Type: \_\_\_\_\_



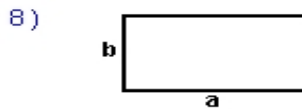
$a = 4.42 \text{ ft}$   
 $c = 10 \text{ ft}$     $h = 4.2 \text{ ft}$

Area: \_\_\_\_\_  
Perimeter: \_\_\_\_\_  
Type: \_\_\_\_\_



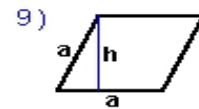
$s = 5.1 \text{ yds}$

Area: \_\_\_\_\_  
Perimeter: \_\_\_\_\_  
Type: \_\_\_\_\_



$a = 8.7 \text{ cm}$     $b = 4.6 \text{ cm}$

Area: \_\_\_\_\_  
Perimeter: \_\_\_\_\_  
Type: \_\_\_\_\_



$a = 5 \text{ mm}$     $h = 4.6 \text{ mm}$

Area: \_\_\_\_\_  
Perimeter: \_\_\_\_\_  
Type: \_\_\_\_\_