


Name: _____


Perimeter Problems

Directions: Solve the equations to find the perimeter of each shape.

1.




2.




3.




4.



5.



6.



Directions: Using a ruler, draw a polygon that has a perimeter of 157 mm.

