


Name \_\_\_\_\_

Date \_\_\_\_\_

## You Be the Judge


Circle the type of energy shown in each picture.




potential energy



potential energy



potential energy




potential energy



potential energy



potential energy



potential energy



potential energy



potential energy



potential energy

An object in motion has kinetic energy.  
An object about to be put in motion has potential energy.

