



Solving Systems of Inequalities

Graph the solution to each system of inequalities.


31. $y < x + 2$
 $x + 2y < 2$



32. $y < x + 2$
 $x + 2y > 2$



33. $x < \frac{3}{2}y + 2$
 $x + 2y < 2$



34. $x < \frac{3}{2}y + 2$
 $x + 2y > 2$

