



**Solving Systems of Inequalities**

**Graph the solution to each system of inequalities.**


31.  $y < x + 2$   
 $x + 2y < 2$



32.  $y < x + 2$   
 $x + 2y > 2$



33.  $x < \frac{3}{2}y + 2$   
 $x + 2y < 2$



34.  $x < \frac{3}{2}y + 2$   
 $x + 2y > 2$

