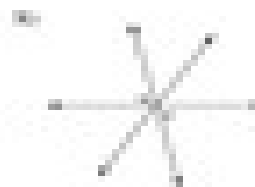




Angle Pair Relationships

Name the relationship: complementary, linear pair, vertical, or adjacent.



Find the measure of angle B.

