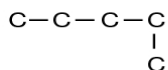
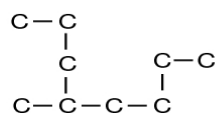


Naming Alkanes, Alkenes, and Alkynes :
Quiz - 70 (most hydrogen atoms are not shown for clarity)

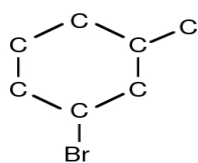
1)



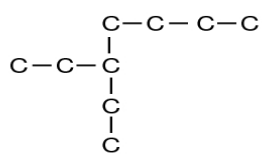
2)



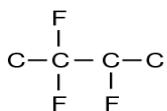
3)



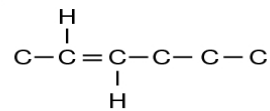
4)



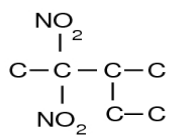
5)



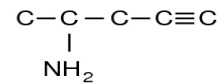
6)



7)



8)



9) Draw a picture of the following.

a) 1-butyne

b) cis-3-methyl-4-octene