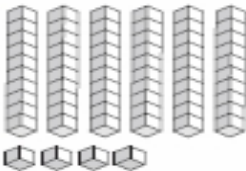


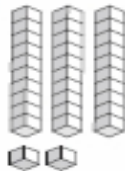
Name : \_\_\_\_\_

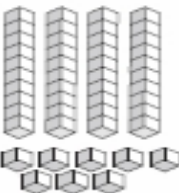
Score : \_\_\_\_\_

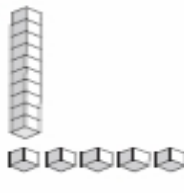
**Tens & Ones**

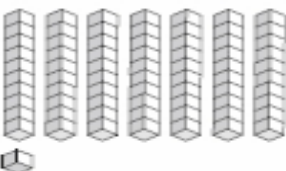
Write the number formed by base ten blocks.

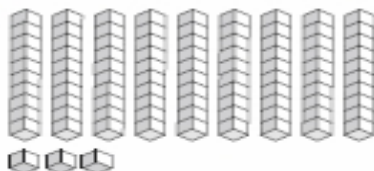
1)  \_\_\_\_\_

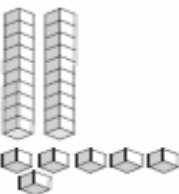
2)  \_\_\_\_\_


3)  \_\_\_\_\_

4)  \_\_\_\_\_

5)  \_\_\_\_\_

6)  \_\_\_\_\_

7)  \_\_\_\_\_

8)  \_\_\_\_\_