

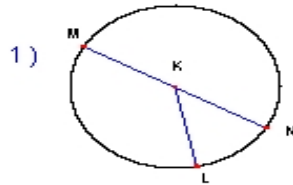
Name : \_\_\_\_\_

Score : \_\_\_\_\_

Teacher : \_\_\_\_\_

Date : \_\_\_\_\_

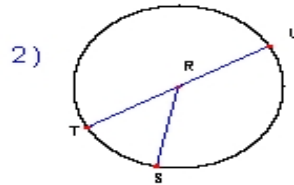
Identify the elements for each problem.



Circle: \_\_\_\_\_

Radius: \_\_\_\_\_

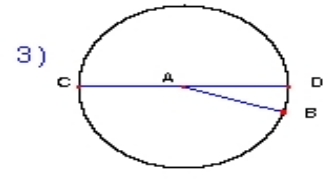
Diameter: \_\_\_\_\_



Circle: \_\_\_\_\_

Radius: \_\_\_\_\_

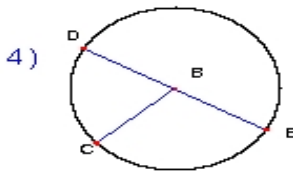
Diameter: \_\_\_\_\_



Circle: \_\_\_\_\_

Radius: \_\_\_\_\_

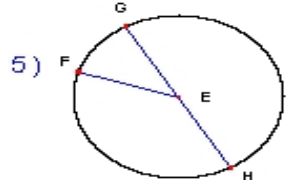
Diameter: \_\_\_\_\_



Circle: \_\_\_\_\_

Radius: \_\_\_\_\_

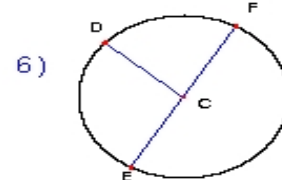
Diameter: \_\_\_\_\_



Circle: \_\_\_\_\_

Radius: \_\_\_\_\_

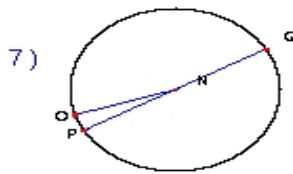
Diameter: \_\_\_\_\_



Circle: \_\_\_\_\_

Radius: \_\_\_\_\_

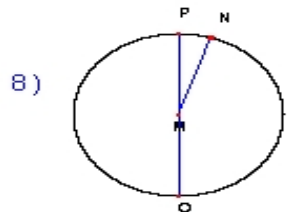
Diameter: \_\_\_\_\_



Circle: \_\_\_\_\_

Radius: \_\_\_\_\_

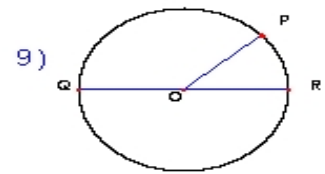
Diameter: \_\_\_\_\_



Circle: \_\_\_\_\_

Radius: \_\_\_\_\_

Diameter: \_\_\_\_\_



Circle: \_\_\_\_\_

Radius: \_\_\_\_\_

Diameter: \_\_\_\_\_