


Name _____


Date _____

Missing Number Math


Fill in the blank with the missing number




5	6	
---	---	--



17	18	
----	----	--




2	3	
---	---	--




8	9	
---	---	--




14	15	
----	----	--




11	12	
----	----	--




18	19	
----	----	--




6	7	
---	---	--




12	13	
----	----	--



4	5	
---	---	--



9	10	
---	----	--



16	17	
----	----	--