

Name : _____

Score : _____

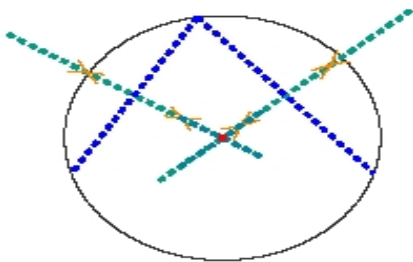
Teacher : _____

Date : _____

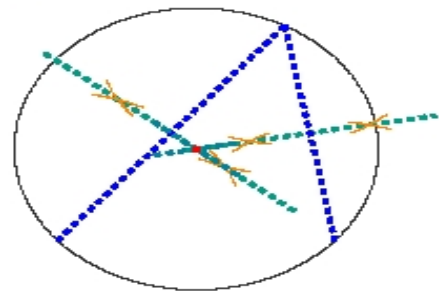
Circle Constructions

Locate the center of each circle.

1)

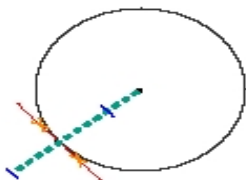


2)



Construct a line segment tangent to the circle through the given point.

3)



4)

