

Name : \_\_\_\_\_

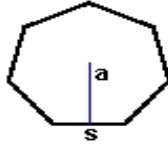
Score : \_\_\_\_\_

Teacher : \_\_\_\_\_

Date : \_\_\_\_\_

**Identify and Calculate the Area and Perimeter for each Polygon.**

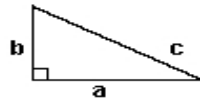
1)



$s = 3.4$  ft  
 $a = 1.7$  ft

Area: \_\_\_\_\_  
Perimeter: \_\_\_\_\_  
Type: \_\_\_\_\_

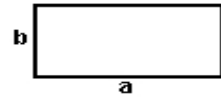
2)



$a = 8.2$  yds    $b = 4.6$  yds  
 $c = 9.4$  yds

Area: \_\_\_\_\_  
Perimeter: \_\_\_\_\_  
Type: \_\_\_\_\_

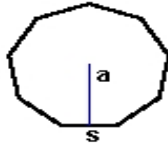
3)



$a = 8.9$  ft    $b = 4.4$  ft

Area: \_\_\_\_\_  
Perimeter: \_\_\_\_\_  
Type: \_\_\_\_\_

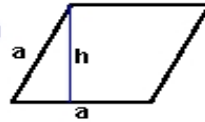
4)



$s = 3.3$  yds  
 $a = 1.65$  yds

Area: \_\_\_\_\_  
Perimeter: \_\_\_\_\_  
Type: \_\_\_\_\_

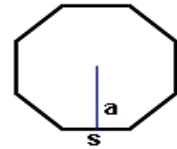
5)



$a = 6.6$  cm    $h = 5.98$  cm

Area: \_\_\_\_\_  
Perimeter: \_\_\_\_\_  
Type: \_\_\_\_\_

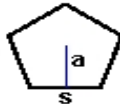
6)



$s = 7.6$  mm  
 $a = 3.29$  mm

Area: \_\_\_\_\_  
Perimeter: \_\_\_\_\_  
Type: \_\_\_\_\_

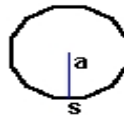
7)



$s = 5.4$  mm  
 $a = 2.57$  mm

Area: \_\_\_\_\_  
Perimeter: \_\_\_\_\_  
Type: \_\_\_\_\_

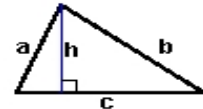
8)



$s = 2.5$  cm  
 $a = 1.25$  cm

Area: \_\_\_\_\_  
Perimeter: \_\_\_\_\_  
Type: \_\_\_\_\_

9)



$a = 5.8$  inches    $b = 8.68$  inches  
 $c = 8.9$  inches    $h = 5.4$  inches

Area: \_\_\_\_\_  
Perimeter: \_\_\_\_\_  
Type: \_\_\_\_\_