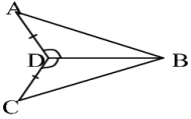
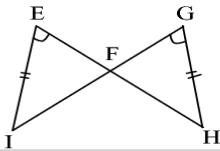
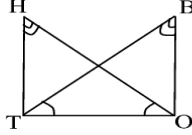
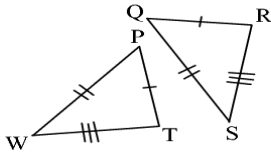
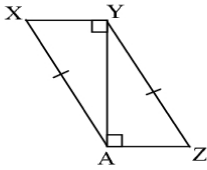
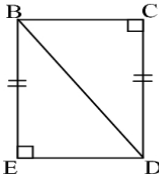
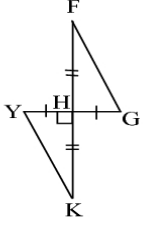
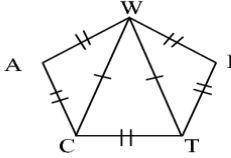
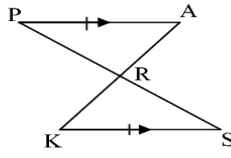


Write a congruence statement for the congruent triangles in each diagram. State the reason for congruence.

<p>1)</p> 	<p>2)</p> 	<p>3)</p> 
<p>Δ _____ \cong Δ _____ by _____</p>	<p>Δ _____ \cong Δ _____ by _____</p>	<p>Δ _____ \cong Δ _____ by _____</p>
<p>4)</p> 	<p>5)</p> 	<p>6)</p> 
<p>Δ _____ \cong Δ _____ by _____</p>	<p>Δ _____ \cong Δ _____ by _____</p>	<p>Δ _____ \cong Δ _____ by _____</p>
<p>7)</p> 	<p>8)</p> 	<p>9)</p> 
<p>Δ _____ \cong Δ _____ by _____</p>	<p>Δ _____ \cong Δ _____ by _____</p>	<p>Δ _____ \cong Δ _____ by _____</p>