

Name : _____

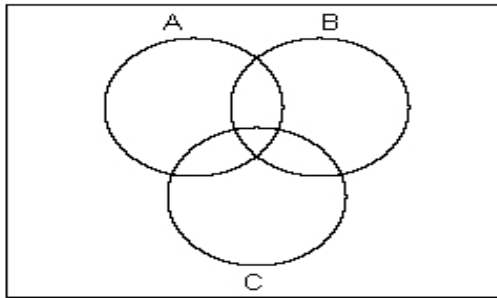
Score : _____

Teacher : _____

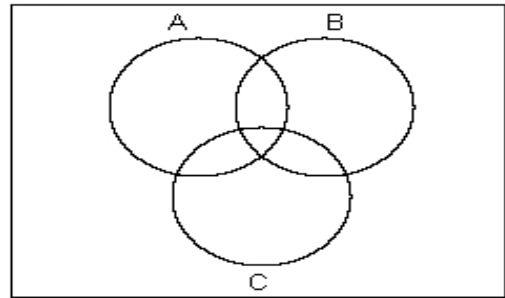
Date : _____

Shade the Venn Diagrams

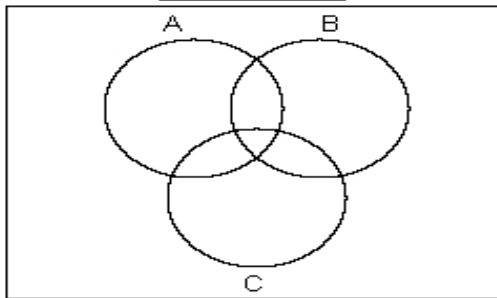
1) Shade $(A \cap C)' \cup B$



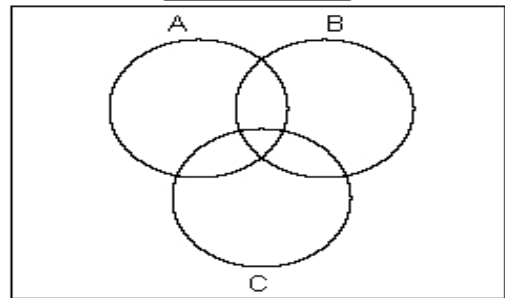
2) Shade $(B \cup C)' \cup A$



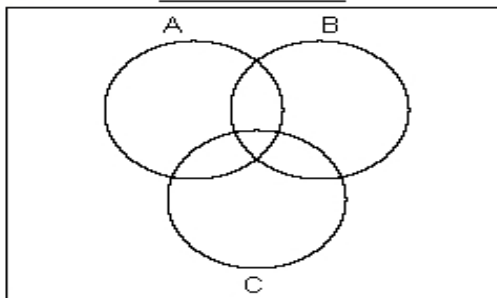
3) Shade $(A \cup B) - C$



4) Shade $A \cup (B - C)$



5) Shade $C' \cap (B - A)$



6) Shade $B' \cap (A - C)$

