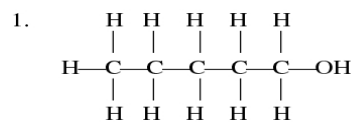
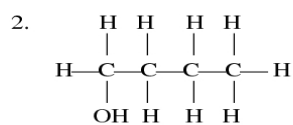


Classifying Organic Compounds by Functional Groups II

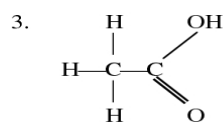
Give the IUPAC name and classify the functional group of each compound.



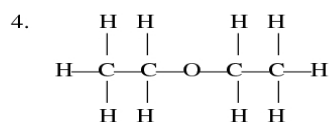
1. _____



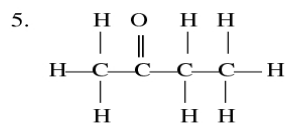
2. _____



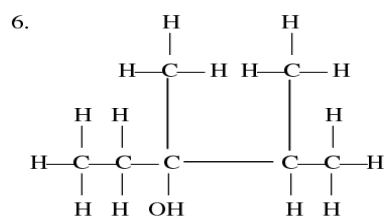
3. _____



4. _____



5. _____



6. _____
