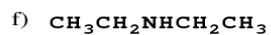
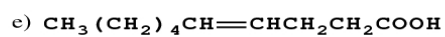
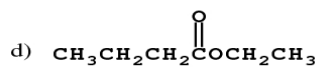
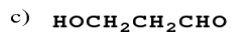
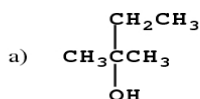


ORGANIC NOMENCLATURE - FUNCTIONAL GROUPS

1) Name these compounds.



2) Write the structural formulas for these compounds.

a) ethylphenylamine

b) 3,3-dimethyl-N-phenyl-2-aminohexane

c) 3-hydroxybutanoic acid

d) octanamide

e) 3-phenylpropanal

f) 4-ethyl-3-heptanol

g) 1,3-dichloro-2-pentanone