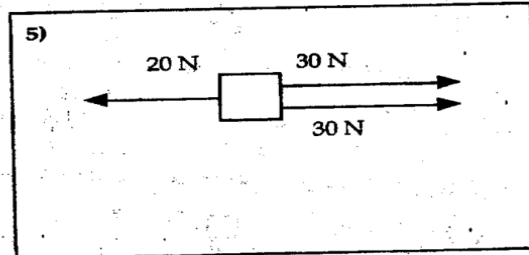
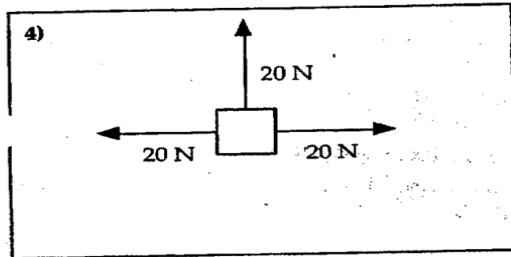
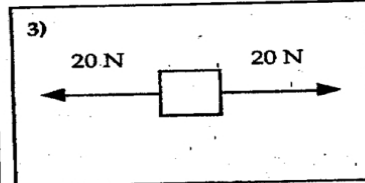
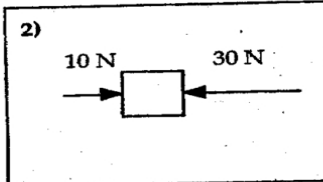
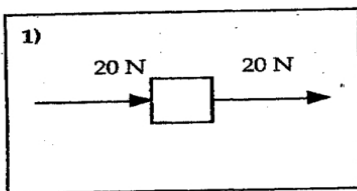


Name: \_\_\_\_\_ Per: \_\_\_\_\_ **NET FORCE WORKSHEET**

Calculate the net force for each of the objects pictured below. Write your answer in the box under each picture.



6. Using the following directions, make a drawing showing a piano being moved. A boy is pulling the piano to the right with a force of 50N and a girl is pushing it to the right with a force of 30N. Label your drawing showing each component force and the net force on the object.

