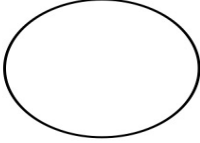
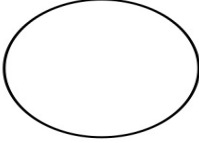
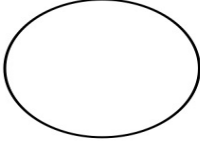
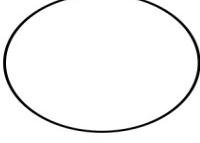
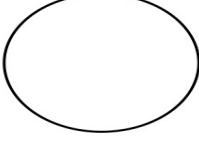
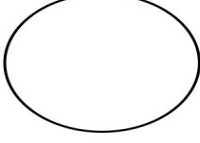
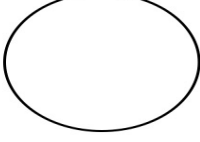
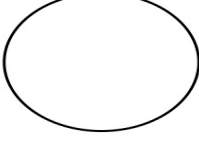


Name: _____

Date: _____

Moon Phase Quiz

Shade in the part of the moon you don't see during each phase.

New Moon 	Waning Crescent 	Waxing Gibbous 
Waning Gibbous 	Last Quarter 	Waxing Crescent 
First Quarter 	Full Moon 	

Write the names of the moon phases in order, starting with the New Moon.

1. _____
2. _____
3. _____
4. _____
5. _____
6. _____
7. _____
8. _____