

Name \_\_\_\_\_


## Mixed Numbers


Identify and name mixed numbers and improper fractions.


Write the mixed number and the improper fraction for each picture.

	Mixed Number $2\frac{2}{3}$	Improper Fraction $\frac{8}{3}$
---	--------------------------------	------------------------------------

	Mixed Number	Improper Fraction
---	--------------	-------------------

	Mixed Number	Improper Fraction
--	--------------	-------------------

	Mixed Number	Improper Fraction
---	--------------	-------------------

	Mixed Number	Improper Fraction
---	--------------	-------------------