

Name : \_\_\_\_\_

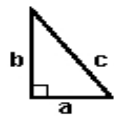
Score : \_\_\_\_\_

Teacher : \_\_\_\_\_

Date : \_\_\_\_\_

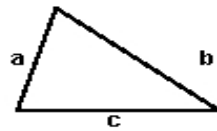
**Identify the Type For Each Triangle**

1)



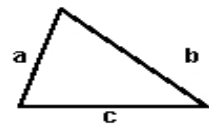
Type: \_\_\_\_\_

2)



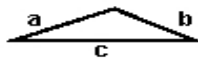
Type: \_\_\_\_\_

3)



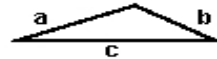
Type: \_\_\_\_\_

4)



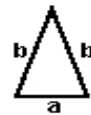
Type: \_\_\_\_\_

5)



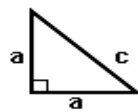
Type: \_\_\_\_\_

6)



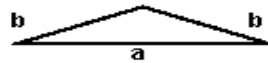
Type: \_\_\_\_\_

7)



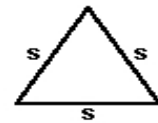
Type: \_\_\_\_\_

8)



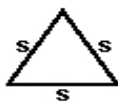
Type: \_\_\_\_\_

9)



Type: \_\_\_\_\_

10)



Type: \_\_\_\_\_

11)



Type: \_\_\_\_\_

12)



Type: \_\_\_\_\_

