

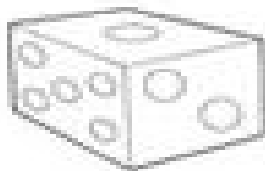



# Solids

Name: \_\_\_\_\_

Write the name of the solid figure that matches the shape of each object. Use the word bank to help you.



cube • sphere • cylinder • cone  
pyramid • rectangular prism