











Name _____

 Analog clock showing 3:00. The hour hand is on 3 and the minute hand is on 12.	<input type="text"/>	 Analog clock showing 3:00. The hour hand is on 3 and the minute hand is on 12.	<input type="text"/>
 Analog clock showing 9:00. The hour hand is on 9 and the minute hand is on 12.	<input type="text"/>	 Analog clock showing 9:00. The hour hand is on 9 and the minute hand is on 12.	<input type="text"/>
 Analog clock showing 6:00. The hour hand is on 6 and the minute hand is on 12.	<input type="text"/>	 Analog clock showing 3:00. The hour hand is on 3 and the minute hand is on 12.	<input type="text"/>
 Analog clock showing 9:00. The hour hand is on 9 and the minute hand is on 12.	<input type="text"/>	 Analog clock showing 12:00. Both the hour and minute hands are on 12.	<input type="text"/>
 Analog clock showing 6:00. The hour hand is on 6 and the minute hand is on 12.	<input type="text"/>	 Analog clock showing 12:00. Both the hour and minute hands are on 12.	<input type="text"/>